









Coin Counting

Circle the correct answer.

1.		1¢ 5¢ 10¢
2.		1¢ 5¢ 10¢
3.		1¢ 5¢ 10¢
4.		5¢ 6¢ 7¢
5.		10¢ 15¢ 20¢
6.		60¢ 50¢ 40¢
7.		6¢ 27¢ 28¢
8.		12¢ 17¢ 20¢
9.	Cadily has 45¢. The candy she wants costs. 85¢. How much more money does Cadily need?	30¢ 35¢ 40¢
10.	Bobby has .50¢. Jane has .45¢. How much money do Bobby and Jane have together?	85¢ 95¢ 99¢